


# How Big Are Sharks?

Follow the instructions to complete the activity.

NAME

DATE


Match each shark to its length by writing the matching letter in each box.



Tiger Shark

A


12 feet (3.7 m)



Shortfin Mako Shark

B


16 feet (4.9 m)



Great White Shark

C

32 feet (9.8 m)



Whale Shark

D

20 feet (6.1 m)

