


How Big Are Sharks?

Follow the instructions to complete the activity.

NAME

DATE


Match each shark to its length by writing the matching letter in each box.



Shortfin Mako Shark

A


11.5 feet
(3.5 meters)



Tiger Shark

B


8 feet
(2.4 meters)



Blacktip Shark

C

16 feet
(4.9 meters)



Bull Shark

D

12 feet
(3.7 meters)

