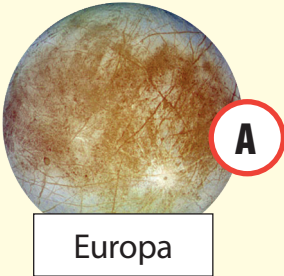



NAME DATE 


Match the names of Jupiter's moons to their descriptions. Write the correct letter in the space provided. Check your answers on page 7 of the book.



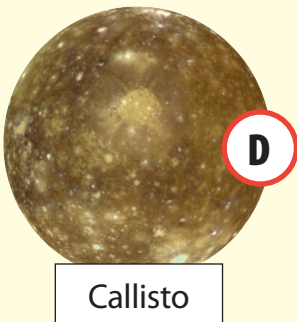
This moon has active volcanos.



Scientists believe that this moon has twice as much water as Earth.



This moon has many craters on its surface.



This is the largest moon in the solar system.

