

Largest Lakes

Follow the instructions below to complete the activity.

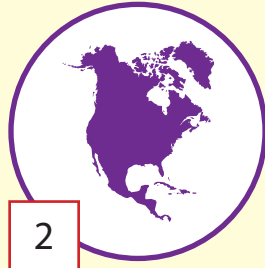
NAME

DATE

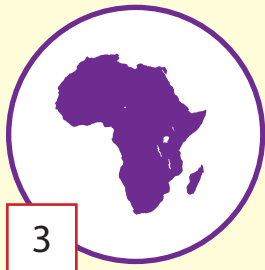
Using information found in the book, pair each continent with its largest lake by writing the continent's number in the space beside the lake's name. Then, record the area of each lake in the space below its name.



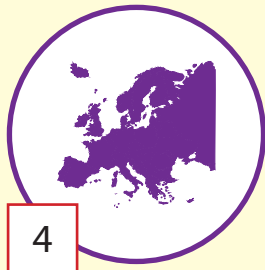
Asia



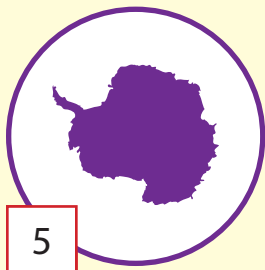
North America



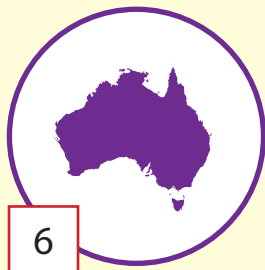
Africa



Europe



Antarctica



Australia



South America

Lake Vostok

Lake Victoria

Lake Superior

Lake Titicaca

Lake Eyre

Caspian Sea

Lake Ladoga

