


## How an Island Forms

Follow the instructions to complete the activity.

NAME


DATE

Look at the pictures of the island formations below, and read the descriptions of how an island forms. Match each picture with its proper description. Write your answer in the box next to each picture.




**A**

Islands erode as they move away from the hot spot.




**B**

Rounded, eroded volcanoes form very old islands.



**C**

Hot mantle from Earth's core forms underwater volcanoes.



**D**

The volcano moves off the "hot spot" over time.

